



# Student Worksheet (Answers) Grades Kindergarten- 2nd


Name: \_\_\_\_\_

*\*\*A selection of questions within the worksheet have been designed to support South Dakota Science Standards, updated as of 2024.*

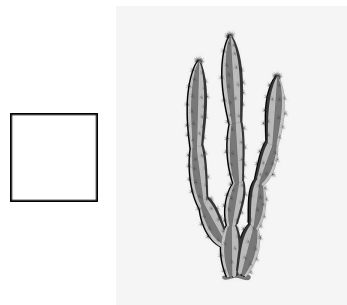
*The answers can be found by exploring the dome, and using your brain!*

## **SAFARI ROOM** (located in the center of the Skydome)


1. There are many different types of plants in this room. Check the box when you find one of each.



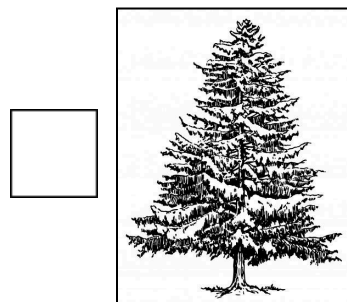
Bromeliad



Cactus



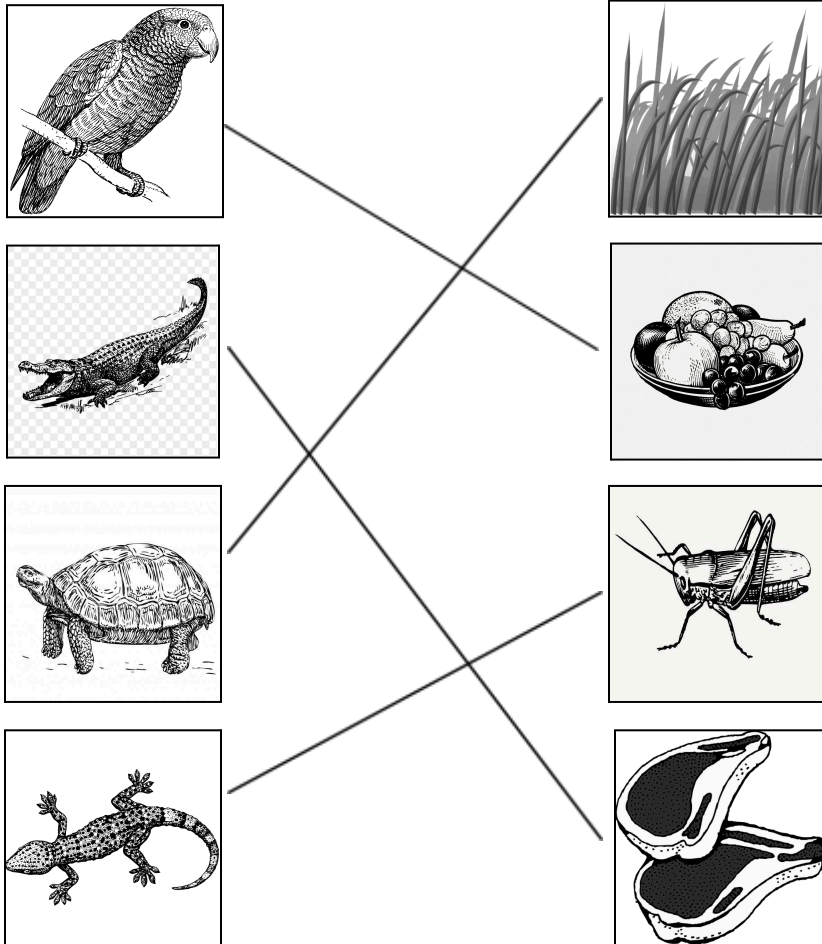
Orchid



Norfolk Pine

2. How many lizards can you find in this room? \_\_\_\_\_

3. (Standard: K-LS1-1) Draw a line from the animal to the food you think it eats.




**MEZZANINE** (upstairs level of the Skydome)

1. Match the name of the snake to the correct picture:


A. Rattlesnake

B. Anaconda


C. Cobra



C



A



B







2. **(Standard: 1-LS3-1)** Here at RG we have two Komodo Dragons. One is a **youngster** in the Upstairs Level, and the other is an **adult** in the Lower Level. What is the main difference you notice between the youngster and the adult?

- a. Horns
- b. Size
- c. Number of legs

**Answer: B**

**LOWER RING** (downstairs level of the Skydome)

1. **(Standard: 2-LS4-1)** Which habitat (home) do you think the scorpion, frog, and parrot would live in? (Draw a line from the animal to the habitat.)

		
		
<u>Pond</u>	<u>Desert</u>	<u>Rainforest</u>

Lines are drawn from the parrot to the Rainforest, from the frog to the Pond, and from the scorpion to the Desert.

2. What might a turtle use its shell for? (circle all that apply)
- a. Protection (armor)
  - b. House (home)
  - c. Sledding (sled)

**Answer: A, B**

**Bonus:** Draw your favorite animal from the Dome!